

Grade 6 Forensics Lab Investigator's Journal



5 W's of the Crime:

- Who?
- What?
- Where?
- Why?
- When?

LIST OF SUSPECTS

- 1.
- 2.
- 3.
- 4.

INITIAL PREDICTIONS ON PRIME SUSPECT:

Based upon the suspect descriptions and motives, who do you think is the clearest suspect guilty of the theft of the moon rock? Why?

FINAL CONCLUSION – WHO IS YOUR PRIME SUSPECT? EXPLAIN.

DISCOVER YOUR FINGERPRINT FORMULA!

_____ 's Fingerprint Record


Left Hand




pinky



ring finger



middle finger




index finger




thumb


Right Hand




pinky



ring finger



middle finger



index finger



thumb

Challenge Question:

Do identical twins have identical fingerprints? _____

For each type of crime scene evidence, record the name or matching suspect evidence.

Handwriting Analysis	Chromatography Analysis	Fibre Analysis
<p>Whose handwriting matches the note left in the van?</p> <p>_____</p>	<p>Which black pen matches the colours found on the note found in the van?</p> <p>Vis-à-Vis Vis Aid Sharpie</p>	<p>Whose shirt fibres match the fibre found on the seat in the van?</p> <p>_____</p>
Soil Analysis	Tire Tread Analysis	Fingerprint Analysis
<p>Which soil location evidence matches the crime scene soil?</p> <p>Circle Sample #</p> <p>1 2 3</p>	<p>Which tire tread # matches the tread pattern in the van?</p> <p>Tire Tread #</p> <p>1 2 3 4</p>	<p>Fingerprint #1</p> <p>_____</p> <p>Fingerprint #2</p> <p>_____</p>